

A KINGDOM OF LOVE



Learning Workbook Level 10

WWW.AKINGDOMOFLOVE.ORG

Student Name: _____

Start Date: _____

**WHAT IS SOMETHING YOU LOOK FORWARD TO
DAILY?**

WHO ALLOW YOU TO REACH THAT GOAL?

EVIDENCE AND SOURCES OF YOUR CONSISTENCY :

**ASSESSMENT AND INSIGHTS OF YOUR TRUE EFFORT TO BE
CONSISTENT.**

**RECOMMENDATIONS TO BECOME BETTER AT BEING
MORE CONSISTENT WITH YOUR RESPONSIBILITIES.**

What do you know about your future?

Topic: _____


Name: _____

Grade: _____

I know that:

I want to know:

I learned that:



GROCERY RUN

LET'S BE A SMART SHOPPER

NAME

GRADE

DATE

FEELING

Andreas is out to buy six items at the grocery store. Research on the web or at your local store to see what he can buy with for 20.00 to make his family a meal. Add everything up, and write the total on the bottom of the list. Don't forget we need to have a full course mean with something sweet and he his brother cannot eat any pork, nuts, or soy.

ITEM

PRICE

My Favorite Holiday

NAME

SECTION

DATE

TEACHER

Write an informational essay about this topic:

What is celebrated on the holiday? Who celebrates the holiday? How is the holiday celebrated? Why is it important? Write a 500-word essay including as many key details about your favorite holiday as you can.

SIMPLE SYMBOLS

Add, Subtract, Multiply, and Divide!

Name: _____

Class/Section: _____

Date: _____

Score: _____

The following equations are missing the signs that make them true. Put +, -, x, and/or ÷ between the numbers to make the equations correct. Remember the order of operations! Can you explain your answer?

$$1.) 9 _ 5 \div (8 _ 3) \times 2 _ 6 = 13$$

$$2.) 90 _ 50 \div (80 _ 30) \times 20 _ 6 = \underline{\hspace{2cm}}$$

$$3.) 17 _ 500 \div (890 _ 32) \times 28 _ -6 = \underline{\hspace{2cm}}$$


THE WEEK THAT WAS

A PHOTO DIARY

For the rest of the week, take several photographs and choose 1 photo to sum up each day of the week and paste them below.

The form consists of seven blank rectangular boxes arranged in a staggered, overlapping pattern. Each box has a blue tab at the top or bottom with the name of a day of the week written in white lowercase letters. The days are: sunday (top-left), monday (top-right), tuesday (middle-left), wednesday (middle-right), thursday (bottom-left), friday (bottom-middle), and saturday (bottom-right). The boxes are outlined in blue and have a light orange shadow effect.

Write a few sentences explaining your choice of photos



Name: _____
Felling: _____
Date: _____
Grade _____

A Personal Quiet Space

WHERE I WOULD WANT TO SPEND MY ALONE TIME

If you could find a quiet spot for your alone time everyday, where would that be? How would you make use of your quiet time? Draw a picture of the PERFECT quiet space.



MY BOOK REVIEW

PICK THE LUCKY BOOK FOR TODAY!

Student Name:

Grade:

Date:

Book Title:

Topic:

Authors:

This week, I read:

After reading the book, I think the most interesting thing I learned was:

I picked this book because:

I think we should/shouldn't read this book for class because:

Goals to Reach Spiritually!

I want to grow my spirit by doing the following in each year:

 year 1 _____

 year 2 _____


 year 3 _____

 year 4 _____

 year 5 _____

 year 6 _____

 year 7 _____



A KINGDOM OF LOVE



Learning Workbook Level 10

WWW.AKINGDOMOFLOVE.ORG

Student Name: _____

Completed Date: _____